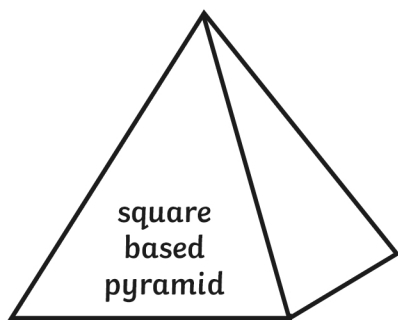


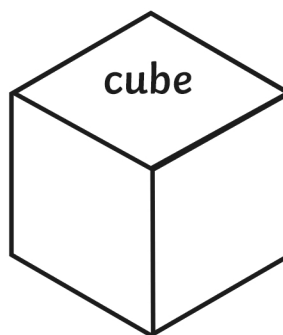
3D Shapes



edges _____

faces/surfaces _____

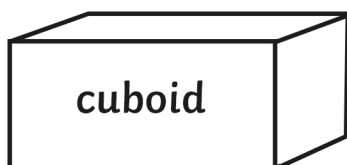
vertices _____



edges _____

faces/surfaces _____

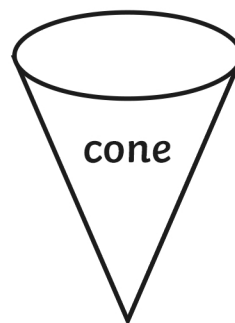
vertices _____



edges _____

faces/surfaces _____

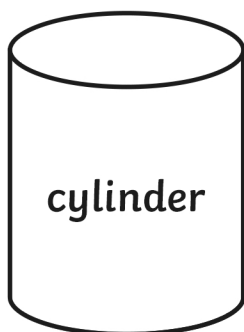
vertices _____



edges _____

faces/surfaces _____

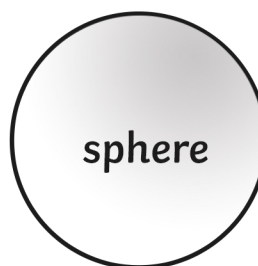
vertices _____



edges _____

faces/surfaces _____

vertices _____

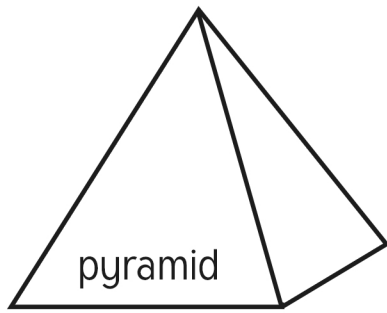


edges _____

faces/surfaces _____

vertices _____

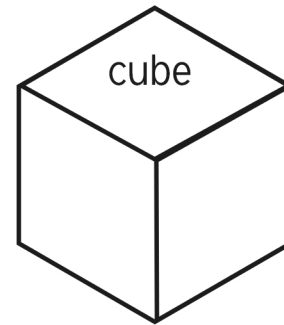
3D Shapes – Answer Sheet



edges – 8

faces/surfaces – 5

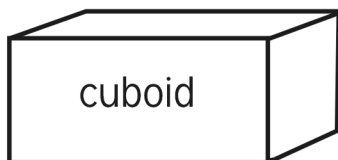
vertices – 5



edges – 12

faces/surfaces – 6

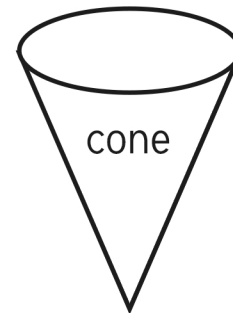
vertices – 8



edges – 12

faces/surfaces – 6

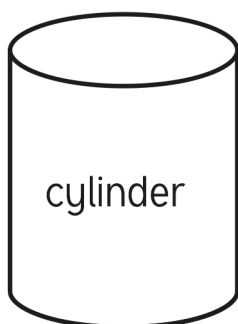
vertices – 8



edges – 1

faces/surfaces – 2

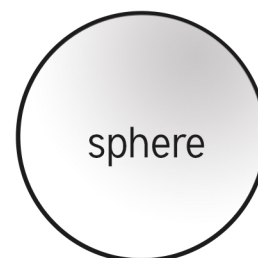
vertices – 1



edges – 2

faces/surfaces – 3

vertices – 0



edges – 0

faces/surfaces – 1

vertices – 0